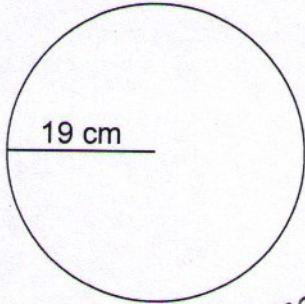


Use 3.14 for π (pi)

Name: _____

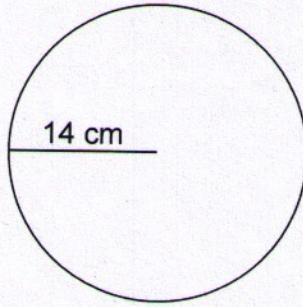
Calculate the circumference and area of each circle.

1.

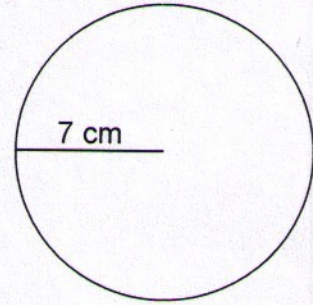


Area = $3.14 \times 19^2 =$
 Circumference = $2 \times 19 \times 3.14 =$

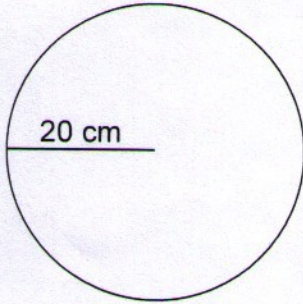
2.



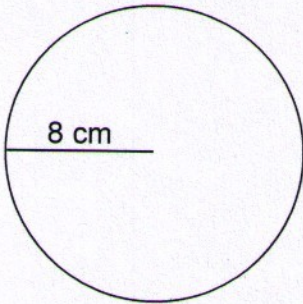
3.



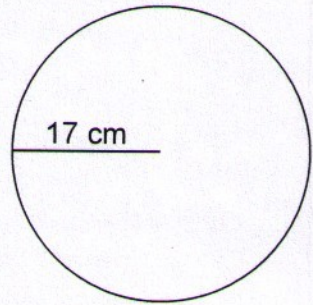
4.



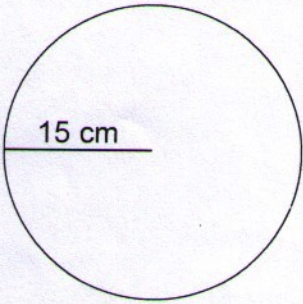
5.



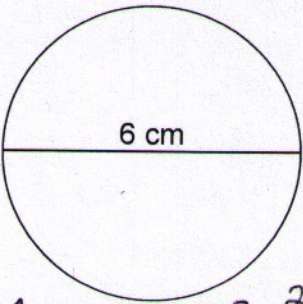
6.



7.

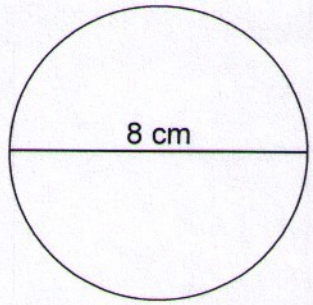


8.

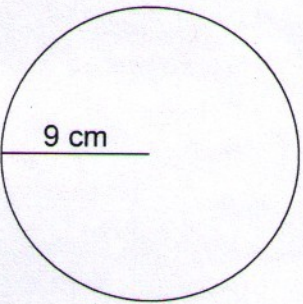


Area = $3.14 \times 3\text{cm}^2 =$
 Circumference = $3.14 \times 6\text{cm} =$

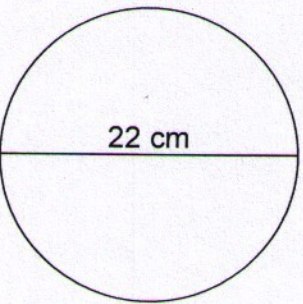
9.



10.



11.



12.

