

Name: _____

Score: _____

Kindergarten Math Problem Solving Assessment Sheet

a. Which group has more? b. How many more? c. How can you make the two sets equal?

1. a. Yes No

b. Correct Response Child's Answer _____

c. Correct Response

Child's Response _____

2. a. Yes No

b. Correct Response Child's Answer _____

c. Correct Response

Child's Response _____

3. a. Yes No

b. Correct Response Child's Answer _____

c. Correct Response





Child's Response _____

4. a. Yes No

b. Correct Response Child's Answer _____

c. Correct Response

Child's Response _____



Math Assessment:

This assessment will be individually assessed and their responses will be recorded on their recording sheet.

Scored:

Goal = 11-12

Proficient = 6-10

Intervention = 0-5

Questions asked for each problem:

- a. Which group has more?
- b. How many more?
- c. How can you make the two sets equal?

Check off this box to indicate a correct response. This helps quickly tally total number of correct responses.

Room _____

Goal = 11-12

Total =

Proficient = 6-10

Total =

Intervention = 0-5

Total =