


Heading:

Find the total magnification for the following microscopes.


1. Eyepiece Low Power High Power
 5 X 15 X 25 X

Show your work!



Total Low: _____


Show your work!



Total High: _____


2. Eyepiece Low Power High Power
 15 X 15 X 30 X

Show your work!



Total Low: _____


Show your work!



Total High: _____


3. Eyepiece Low Power High Power
 40 X 45 X 50 X

Show your work!



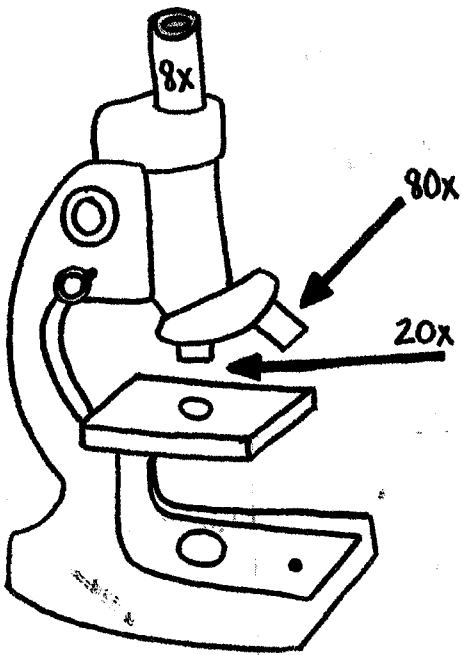
Total Low: _____

Show your work!



Total High: _____

4.



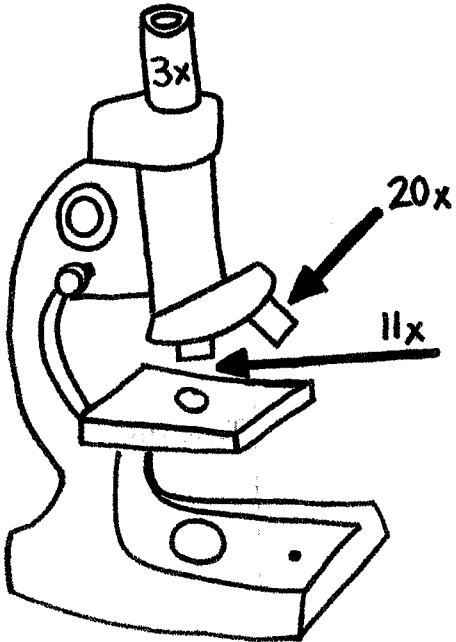
Show your work!

Total Low: _____

Show your work!

Total High: _____

5.



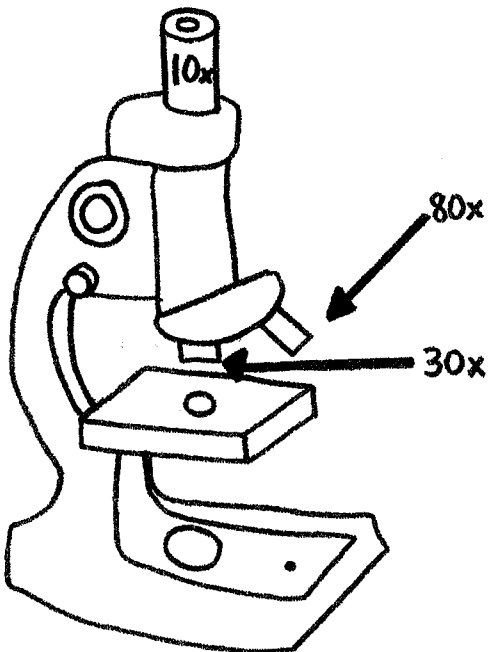
Show your work!

Total Low: _____

Show your work!

Total High: _____

6.



Show your work!

Total Low: _____

Show your work!

Total High: _____