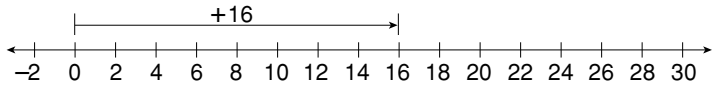


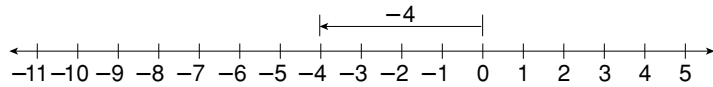
**LESSON** **Puzzles, Twisters & Teasers**  
**1-4** *Sum-Thing Is Funny!*

Use the number lines to find the sums. Then answer the riddle.

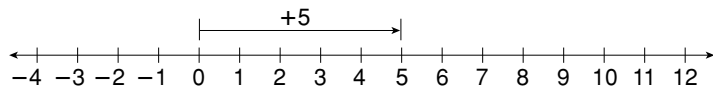
**D**  $16 + (-4)$  \_\_\_\_\_



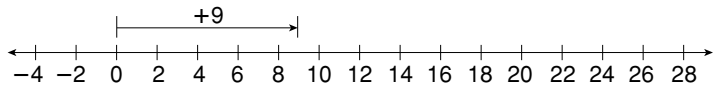
**V**  $-4 + 7$  \_\_\_\_\_



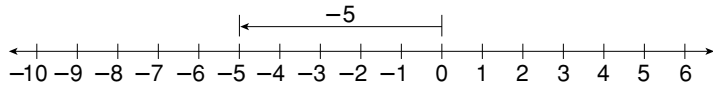
**O**  $5 + (-7)$  \_\_\_\_\_



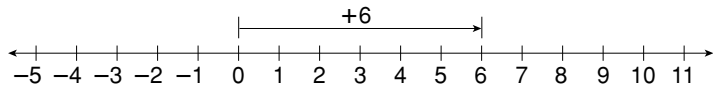
**E**  $9 + 12$  \_\_\_\_\_



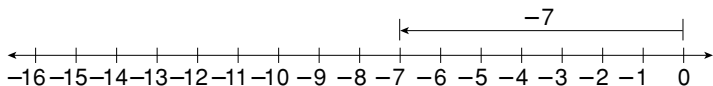
**F**  $-5 + 5$  \_\_\_\_\_



**R**  $6 + (-4)$  \_\_\_\_\_



**T**  $-7 + (-9)$  \_\_\_\_\_



What do you get when you cross a jet with a hamburger?

3	21	2	<b>Y</b>
0	<b>A</b>	<b>S</b>	-16
0	-2	-2	12

